

You should now know your **2** times table.

Try these questions to make sure.

$2 \times 9 =$

$2 \times 4 =$

$2 \times 6 =$

$2 \times 1 =$

$2 \times 2 =$

$2 \times 7 =$

$2 \times 3 =$

$2 \times 10 =$

$2 \times 5 =$

$2 \times 8 =$

When you have completed this book, ask your teacher to test you on your **2** times table.

I know my **2** times table.

Pupil's signature _____

Teacher's signature _____

2 Times Table

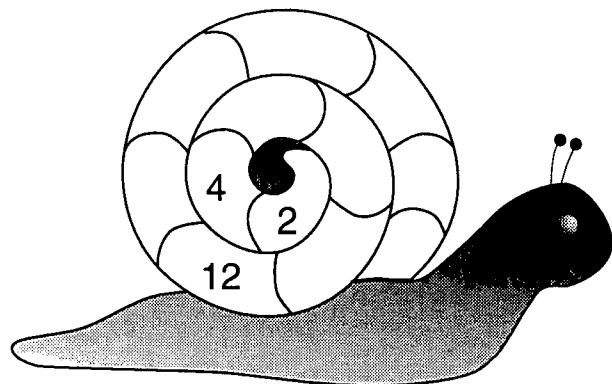
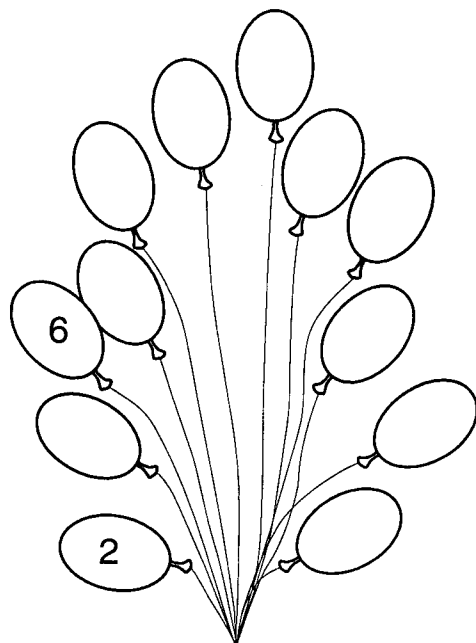
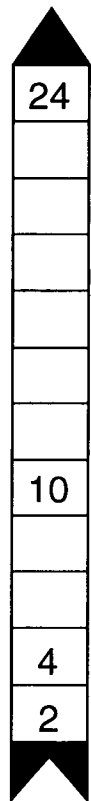
2

Times Table

Booklet

Name _____

Continue the jumping in **2**'s pattern.



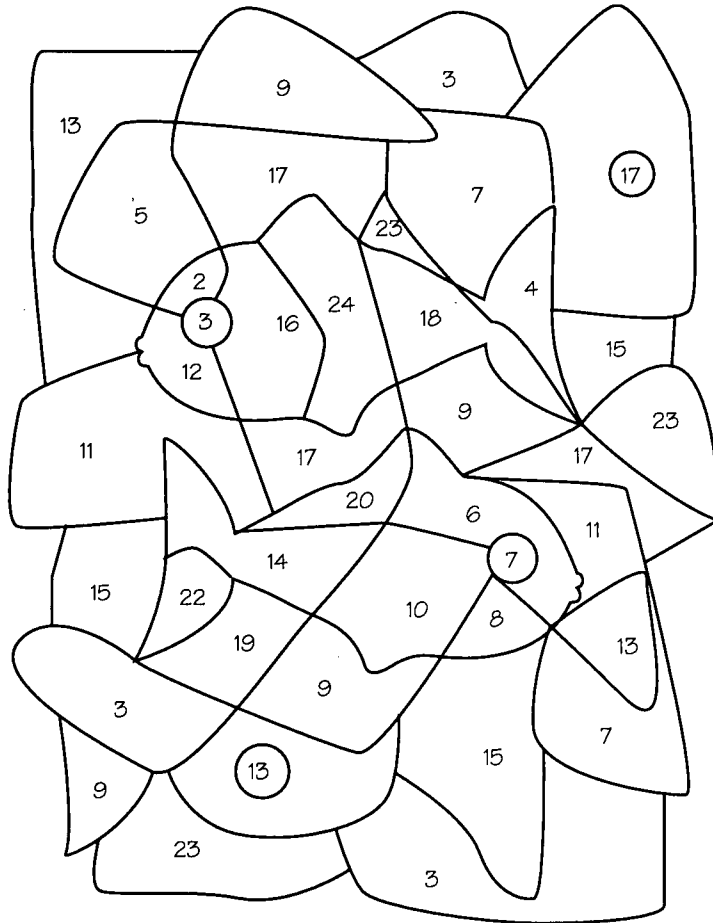
Map the multiples of **2**.

Mappings

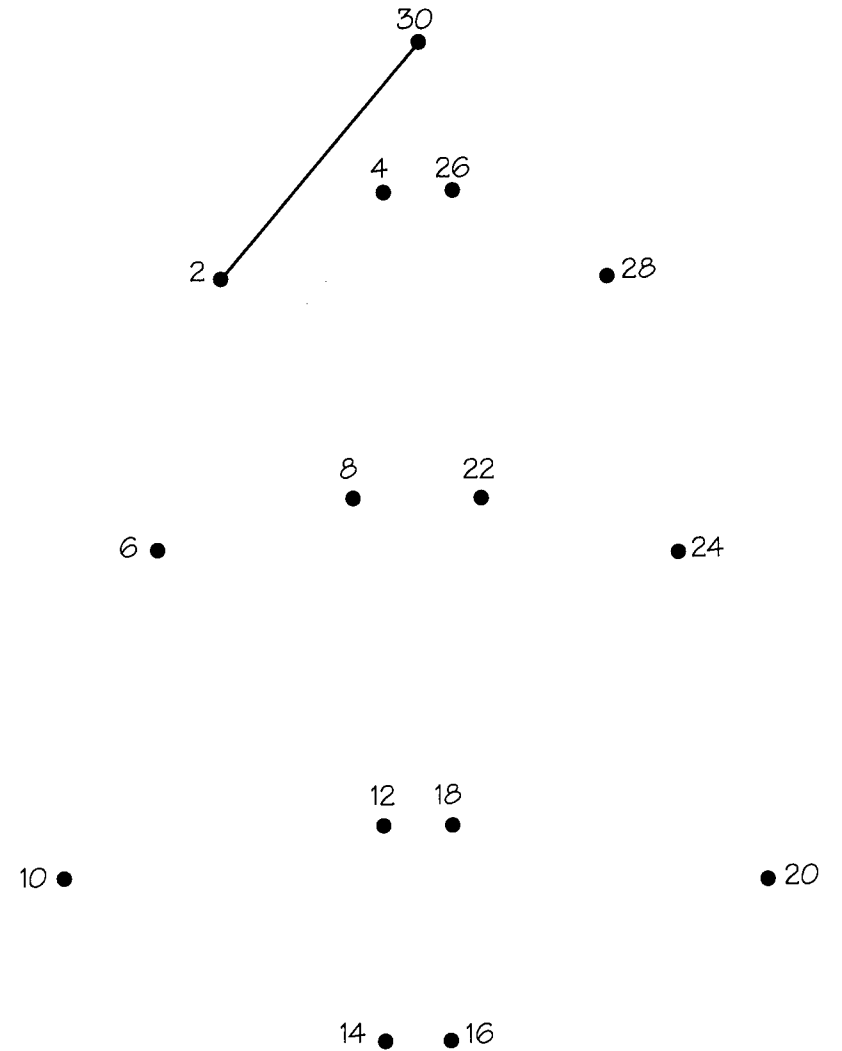
Mark the test paper

1. $2 \times 6 = 12$ ✓	6. $2 \times 8 = 20$
2. $2 \times 7 = 16$ ✗	7. $2 \times 4 = 8$
3. $2 \times 5 = 10$	8. $2 \times 9 = 18$
4. $2 \times 3 = 6$	9. $2 \times 2 = 6$
5. $2 \times 10 = 16$	10. $2 \times 11 = 22$

Shade each region which is a multiple of 2.




Join up the multiples of 2 in order.



Use the multiples of **2**.

Fill in the steps on each ladder.



Complete the **2** times table.

$2 \times 1 = 2$

$2 \times 7 = \square$

$2 \times 2 = 4$

$2 \times 8 = \square$

$2 \times 3 = \square$

$2 \times 9 = \square$

$2 \times 4 = \square$

$2 \times 10 = \square$

$2 \times 5 = \square$

$2 \times 11 = \square$

$2 \times 6 = \square$

$2 \times 12 = \square$

Shade all the multiples of **2**.

1	2	3	4	5	6	7	8	9	10
11	12	13	14	15	16	17	18	19	20
21	22	23	24	25	26	27	28	29	30
31	32	33	34	35	36	37	38	39	40
41	42	43	44	45	46	47	48	49	50
51	52	53	54	55	56	57	58	59	60
61	62	63	64	65	66	67	68	69	70
71	72	73	74	75	76	77	78	79	80
81	82	83	84	85	86	87	88	89	90
91	92	93	94	95	96	97	98	99	100